

20

Lara had some money.

She spent £1.25 on a drink.

She spent £1.60 on a sandwich.

She has **three-quarters** of her money left.



How much money did Lara have to **start with**?

Show your method

6

Jacob cuts 4 metres of ribbon into **three** pieces.

The length of the first piece is **1.28** metres.

The length of the second piece is **1.65** metres.



Work out the length of the third piece.

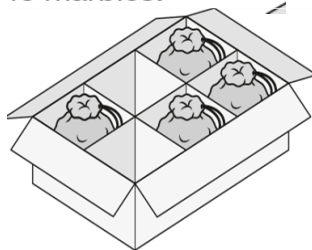
Show your method

11

A toy shop orders 11 boxes of marbles.

Each box contains 6 bags of marbles.

Each bag contains 45 marbles.

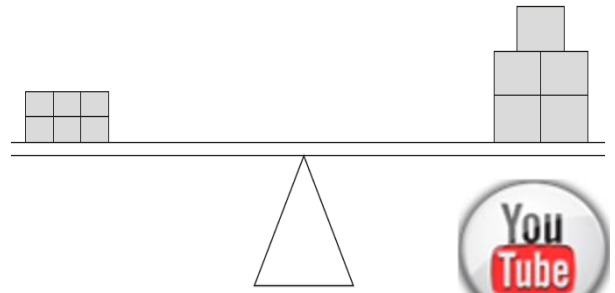


How many **marbles** does the shop order in total?

Show your method

16

6 small bricks have the same mass as 5 large bricks.



The mass of one small brick is 2.5 kg.

What is the mass of one large brick?

Show your method

Y6 SATs

2006A KS2 Q7



Lin needs to solve this problem.

'How many children are in the class?'



Tick (✓) **all** the information that Lin needs to solve her problem.

- There are 9 girls in the class.
- 5 girls in the class wear glasses.
- There are twice as many boys as girls in the class.

Problem Solving


Help Code : 023

BOOSTER

2000A KS2 Q12



Leon and Sara each started with **different** numbers.



Leon and Sara both get the **same** answer.

What numbers could they have started with?

Leon

Sara