



PICTOGRAMS

Help Code : 046

Class 6 collect litter from a park.

This chart shows some of the litter they have collected so far.

How many bottles have Class 6 collected?





bottles					
cans					
bags					

Key	
	= 100 bottles
	= 100 cans
	= 100 bags

How many **more** bags than cans have they collected?



2008A KS2 Q5

Park School collects money for three charities.

This pictogram shows how much they have collected.



stands for £100

Save Dolphins					
Wildwatch					
Plant-a-Tree					

How much more have they collected for Save Dolphins than Plant-a-Tree?



The target for Wildwatch is £500

How much **more** money do they need to collect for Wildwatch?



A camping shop sells **tents**, **sleeping bags** and **backpacks**.
This chart shows how many of each they sold in June.



Items sold in June




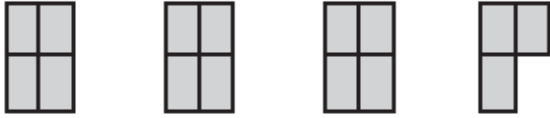

is 4 tents



is 4 sleeping bags



is 4 backpacks

tents	
sleeping bags	
backpacks	

The shop had **20** sleeping bags at the **beginning of June**.

How many of these sleeping bags did the shop have left at the **end of June**?



In **July**, the shop sold **three times as many tents** as in June.

How many tents did the shop sell in **July**?

